

© International Baccalaureate Organization 2023

All rights reserved. No part of this product may be reproduced in any form or by any electronic or mechanical means, including information storage and retrieval systems, without the prior written permission from the IB. Additionally, the license tied with this product prohibits use of any selected files or extracts from this product. Use by third parties, including but not limited to publishers, private teachers, tutoring or study services, preparatory schools, vendors operating curriculum mapping services or teacher resource digital platforms and app developers, whether fee-covered or not, is prohibited and is a criminal offense.

More information on how to request written permission in the form of a license can be obtained from <https://ibo.org/become-an-ib-school/ib-publishing/licensing/applying-for-a-license/>.

© Organisation du Baccalauréat International 2023

Tous droits réservés. Aucune partie de ce produit ne peut être reproduite sous quelque forme ni par quelque moyen que ce soit, électronique ou mécanique, y compris des systèmes de stockage et de récupération d'informations, sans l'autorisation écrite préalable de l'IB. De plus, la licence associée à ce produit interdit toute utilisation de tout fichier ou extrait sélectionné dans ce produit. L'utilisation par des tiers, y compris, sans toutefois s'y limiter, des éditeurs, des professeurs particuliers, des services de tutorat ou d'aide aux études, des établissements de préparation à l'enseignement supérieur, des fournisseurs de services de planification des programmes d'études, des gestionnaires de plateformes pédagogiques en ligne, et des développeurs d'applications, moyennant paiement ou non, est interdite et constitue une infraction pénale.

Pour plus d'informations sur la procédure à suivre pour obtenir une autorisation écrite sous la forme d'une licence, rendez-vous à l'adresse <https://ibo.org/become-an-ib-school/ib-publishing/licensing/applying-for-a-license/>.

© Organización del Bachillerato Internacional, 2023

Todos los derechos reservados. No se podrá reproducir ninguna parte de este producto de ninguna forma ni por ningún medio electrónico o mecánico, incluidos los sistemas de almacenamiento y recuperación de información, sin la previa autorización por escrito del IB. Además, la licencia vinculada a este producto prohíbe el uso de todo archivo o fragmento seleccionado de este producto. El uso por parte de terceros —lo que incluye, a título enunciativo, editoriales, profesores particulares, servicios de apoyo académico o ayuda para el estudio, colegios preparatorios, desarrolladores de aplicaciones y entidades que presten servicios de planificación curricular u ofrezcan recursos para docentes mediante plataformas digitales—, ya sea incluido en tasas o no, está prohibido y constituye un delito.

En este enlace encontrará más información sobre cómo solicitar una autorización por escrito en forma de licencia: <https://ibo.org/become-an-ib-school/ib-publishing/licensing/applying-for-a-license/>.

Biology

Higher level

Paper 3

17 May 2023

Zone A afternoon | Zone B morning | Zone C afternoon

Candidate session number

1 hour 15 minutes

--	--	--	--	--	--	--	--	--	--

Instructions to candidates

- Write your session number in the boxes above.
- Do not open this examination paper until instructed to do so.
- Answers must be written within the answer boxes provided.
- A calculator is required for this paper.
- The maximum mark for this examination paper is **[45 marks]**.

Section A	Questions
Answer all questions.	1 – 3

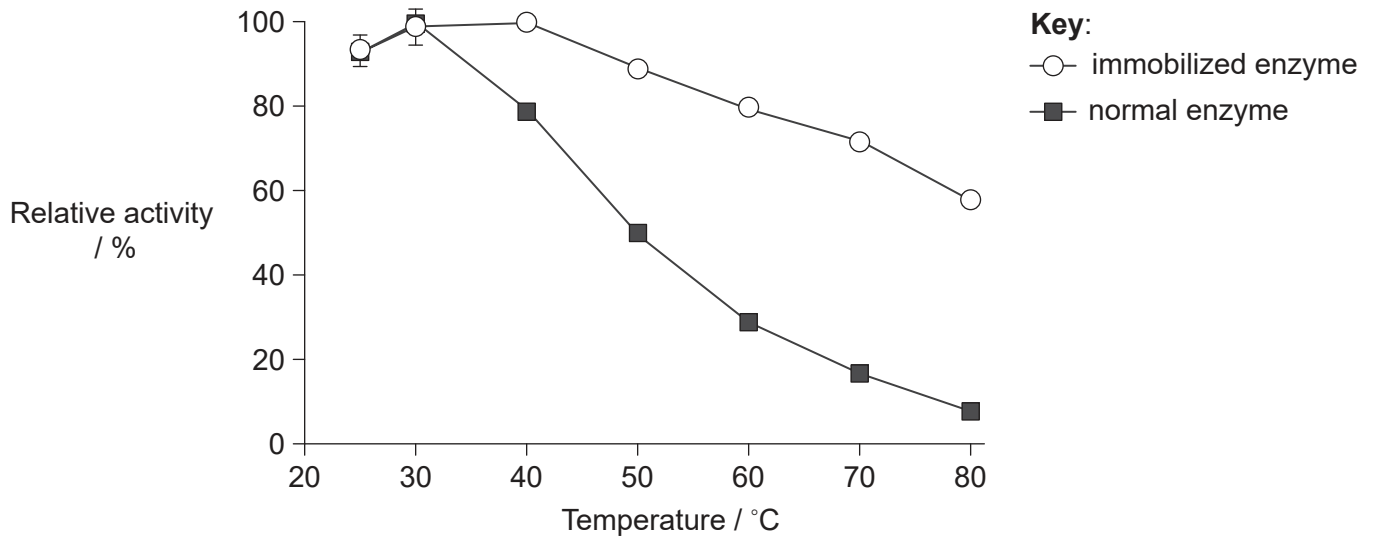
Section B	Questions
Answer all of the questions from one of the options.	
Option A — Neurobiology and behaviour	4 – 8
Option B — Biotechnology and bioinformatics	9 – 14
Option C — Ecology and conservation	15 – 19
Option D — Human physiology	20 – 24



Section A

Answer **all** questions. Answers must be written within the answer boxes provided.

1. Peroxidase enzyme (HRP) in horseradish (*Armoracia rusticana*) plants is used to break down hydrogen peroxide into water and oxygen. The extracted enzyme also has industrial uses when immobilized in ferrosiferic oxide (Fe_3O_4) and embedded in a polymer matrix. The graph shows the relative activity of HRP in both its free and immobilized forms at different temperatures. The results are a mean of three trials.



- (a) State the effect that immobilizing the enzyme had on the relative activity of the enzyme. [1]

.....
.....

- (b) Identify **one** variable that should be kept constant while measuring enzyme activity at all temperatures. [1]

.....
.....

- (c) Evaluate the reliability of the results. [1]

.....
.....

(This question continues on the following page)



40EP02

(Question 1 continued)

- (d) Using the information in the graph, describe how the experiment could be extended to determine the optimum temperature for immobilized HRP. [2]

.....

.....

.....

.....



40EP03

Turn over

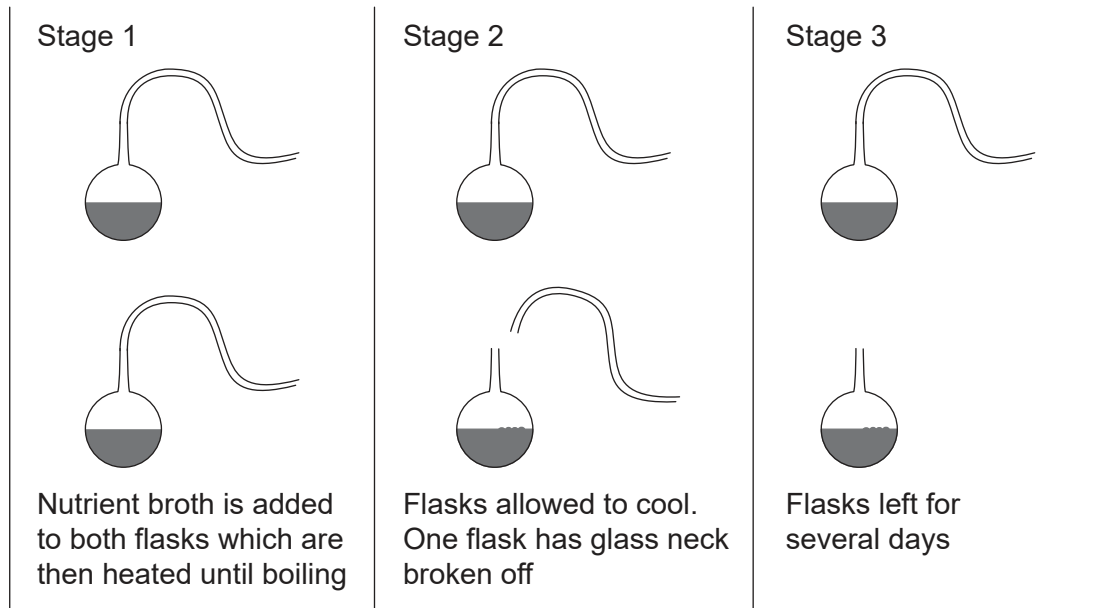
Please **do not** write on this page.

Answers written on this page
will not be marked.



40EP04

2. Between 1860 and 1862, Pasteur carried out a series of experiments focusing on the development of microbes. The illustrations show Pasteur's diagrams and procedure for one experiment.



(a) Outline the reason for boiling the broth in Stage 1. [1]

.....

.....

(b) Describe how Pasteur included a control in his experiment. [1]

.....

.....

(c) Explain Pasteur's conclusions from his observations at Stage 3 of this experiment. [2]

.....

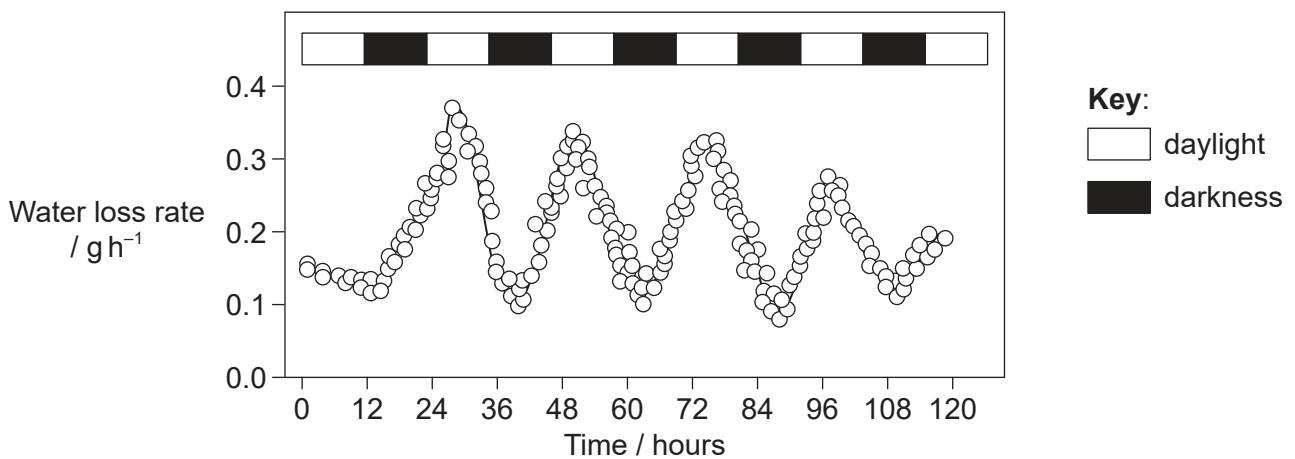
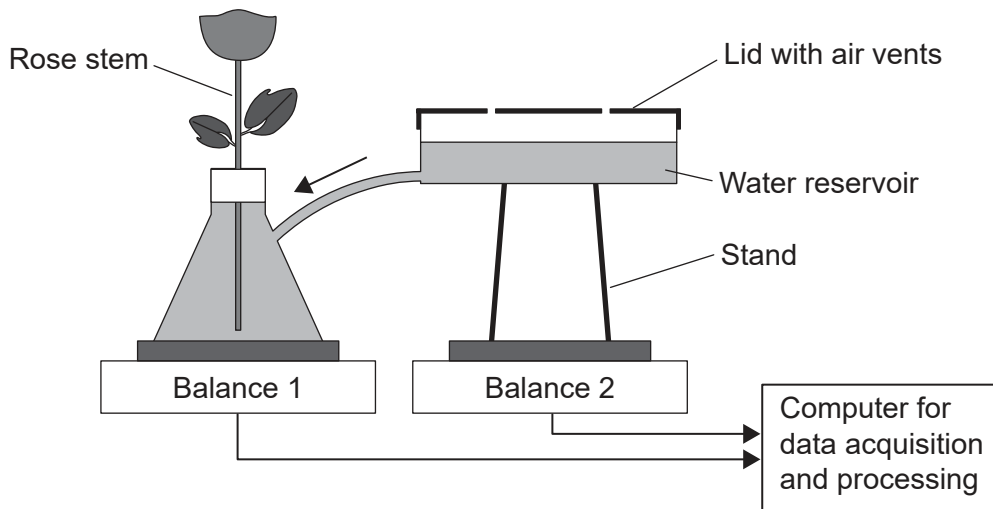
.....

.....

.....



3. Researchers set up apparatus that continuously monitored the rates of water uptake and loss from cut flowers. A rose shoot was inserted into a flask of water placed on a balance. The flask was kept full by a water supply from a reservoir. The graph shows the results over five days.



- (a) Suggest a reason for including a lid with vents above the water reservoir. [1]

.....

.....

(This question continues on the following page)



(Question 3 continued)

(b) Explain the differences in the water loss rate in dark and light conditions. [2]

.....
.....
.....
.....

(c) Describe how the rose shoot could be treated to show what part of the plant loses water. [1]

.....
.....

(d) A standard potometer only measures water uptake. Explain how this apparatus measures the amount of water lost by the shoot as well as uptake. [2]

.....
.....
.....
.....



40EP07

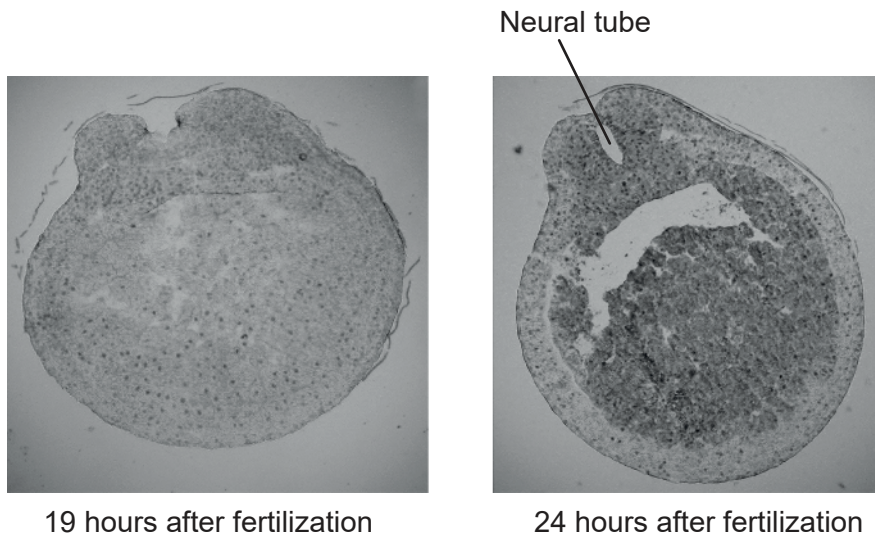
Turn over

Section B

Answer **all** of the questions from **one** of the options. Answers must be written within the answer boxes provided.

Option A — Neurobiology and behaviour

4. The images show cross sections through the embryo of the African clawed frog *Xenopus laevis* at 19 and 24 hours after fertilization.



- (a) Describe the formation of the neural tube between 19 and 24 hours after fertilization. [2]

.....

.....

.....

.....

- (b) Explain how development of the nervous system in the frog would continue after 24 hours. [3]

.....

.....

.....

.....

.....

.....

(Option A continues on the following page)



40EP08

(Option A, question 4 continued)

(c) Suggest an advantage of using animal experiments to identify the role of brain parts. [1]

.....

.....

(Option A continues on the following page)

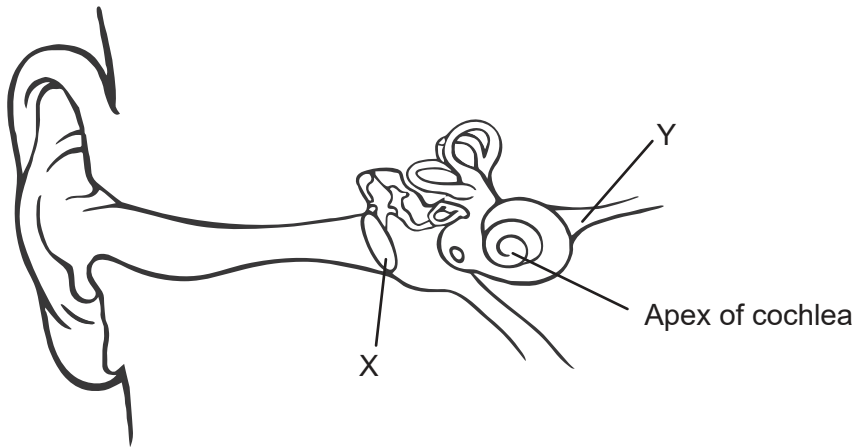


40EP09

Turn over

(Option A continued)

5. The diagram shows a section through the ear.



(a) Identify structures X and Y. [2]

X:
Y:

(b) State how sound waves are changed by bones in the middle ear. [1]

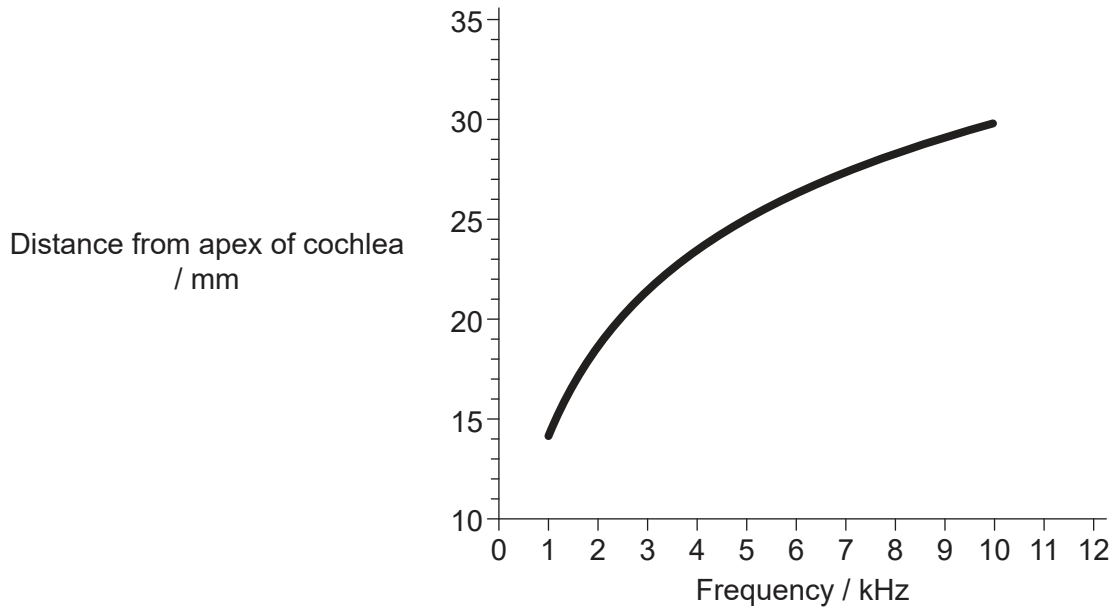
.....
.....

(Option A continues on the following page)



(Option A, question 5 continued)

- (c) The graph shows the distance from the apex of the cochlea to the region where different frequencies of sound wave are interpreted.



Explain how high frequency and low frequency sounds are distinguished.

[3]

.....

.....

.....

.....

.....

.....

(Option A continues on the following page)

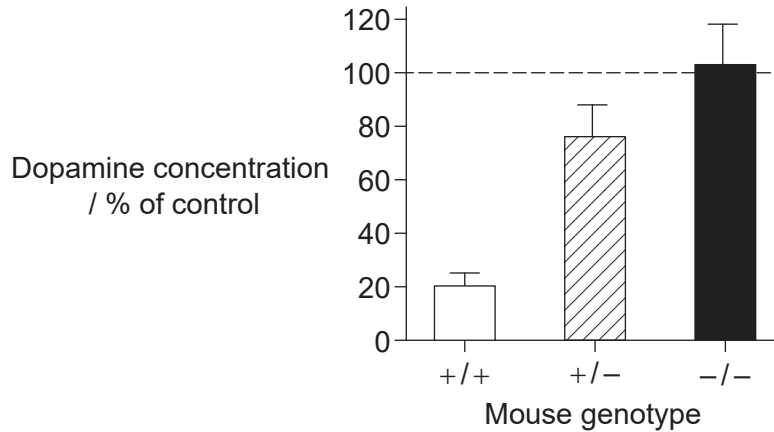


40EP11

Turn over

(Option A continued)

6. Dopamine transporter protein (DAT) is involved in the reabsorption of dopamine in presynaptic neurons. Mice can be homozygous (+/+) or heterozygous (+/-), or they can lack the gene (-/-) to produce DAT. Mice were given four injections of the stimulant methamphetamine, each given two hours apart, and the level of dopamine in synapses in the brain was recorded after two days. The data is presented as percentages of dopamine levels in saline controls.



(a) Using the data in the graph, state the effect of DAT on dopamine concentration in synapses.

[1]

.....

(b) Describe the effect of stimulants on the nervous system.

[3]

.....
.....
.....
.....
.....
.....

(Option A continues on the following page)



40EP12

(Option A, question 6 continued)

- (c) Sedatives are a group of drugs that relax the central nervous system. State **one** example of a sedative drug. [1]

.....

.....

- (d) Outline how social environment can contribute to drug addiction. [2]

.....

.....

.....

.....

(Option A continues on the following page)



40EP13

Turn over

(Option A continued)

- 7. The willie wagtail (*Rhipidura leucophrys*) is a common species of bird found in New Guinea and Australia. It feeds by foraging for a diverse selection of prey, including arthropods and lizards. When a willie wagtail catches prey, it either eats it or flies back to the nest to feed a young nestling bird. Researchers studied the feces of the birds to determine the size of prey eaten by the adults and the nestlings. The results are shown in the chart.



Chart removed for copyright reasons

- (a) State the range of prey size most frequently eaten by adults, giving the units. [1]

.....

- (b) Suggest a reason for the differences between prey size eaten by adults and fed to nestlings. [1]

.....

.....

- (c) Adults eat some prey larger than 30 mm but none between 16 and 30 mm. Suggest a reason for this difference. [1]

.....

.....

(Option A continues on the following page)



40EP14

(Option A, question 7 continued)

- (d) Explain how the foraging behaviour shown in the graph could have evolved in willie wagtails.

[2]

.....

.....

.....

.....

8. Explain how breathing is controlled by the brain.

[6]

.....

.....

.....

.....

.....

.....

.....

.....

.....

.....

.....

.....

.....

.....

.....

.....

.....

.....

.....

.....

.....

.....

.....

End of Option A



40EP15

Turn over

Option B — Biotechnology and bioinformatics

9. The diagrams show three types of fermenters. The arrows show where substances are added to or removed from the fermenters. The curves on the graph represent the quantity of product obtained from each fermenter at a given time.

Removed for copyright reasons

- (a) Identify the curve for the product obtained from the batch fermenter. [1]

.....

- (b) State **one** condition that should be kept constant in the fermenters to maximize output. [1]

.....

(Option B continues on the following page)



(Option B, question 9 continued)

- (c) Explain reasons that the amount of product obtained from the fed-batch and the continuous fermenter differs.

[2]

.....

.....

.....

.....

(Option B continues on the following page)



40EP17


Turn over

(Option B continued)

10. When apples are damaged or cut, exposure to oxygen causes the enzyme polyphenol oxidase (PPO) to oxidize polyphenols in the apple, a reaction that leads to the flesh becoming brown. Scientists have developed transgenic apples in which browning does not occur.



Normal apple



Transgenic apple

- (a) Suggest a reason for browning not occurring in the transgenic apple. [1]

.....
.....

- (b) A marker gene in transgenic apples produces a protein called NPTII. Outline the role of marker genes. [1]

.....
.....

- (c) Describe how calcium chloride can be used in genetic modification. [2]

.....
.....
.....
.....

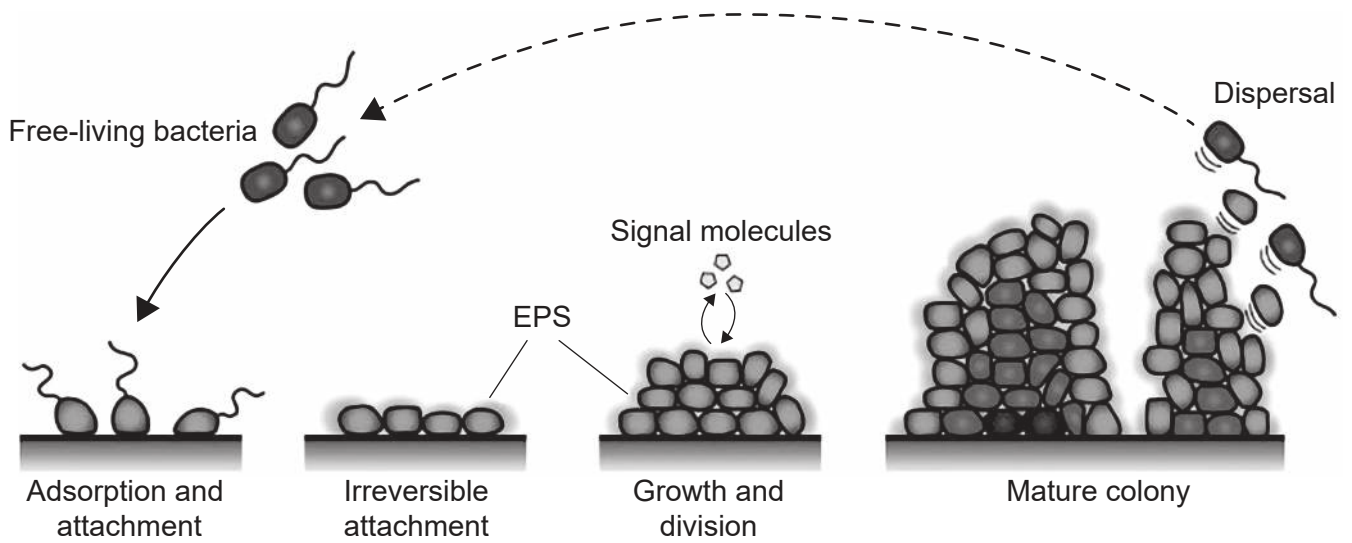
(Option B continues on the following page)



40EP18

(Option B continued)

11. The image shows the life cycle of a biofilm.



(a) State **one** function of biopolymers (EPS) in the biofilm. [1]

.....

(b) Describe emergent properties in mature colonies of biofilms, other than EPS production. [2]

.....
.....
.....
.....

(c) Explain how biofilms can be useful in the treatment of sewage. [3]

.....
.....
.....
.....
.....
.....

(Option B continues on the following page)

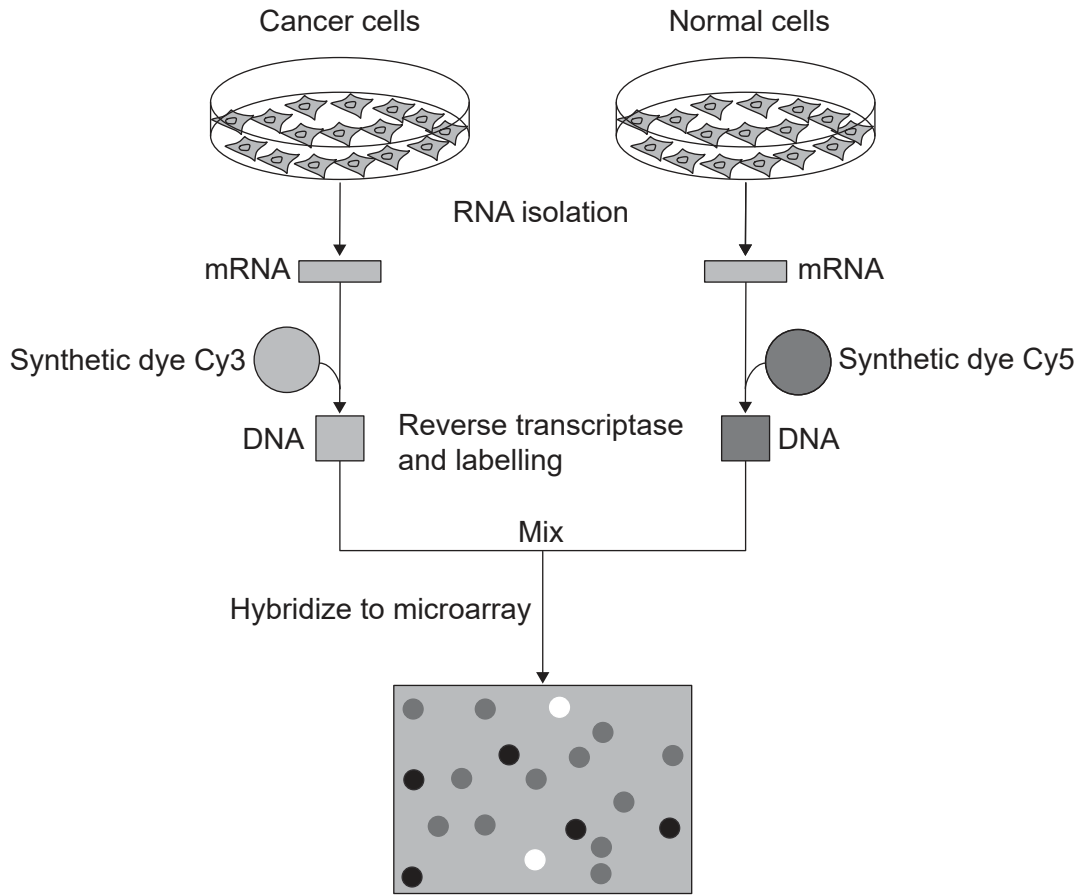


40EP19

Turn over

(Option B continued)

12. The diagram shows the steps in preparing a DNA microarray to detect cancer in a patient.



(a) Outline the reason that DNA is labelled with synthetic dyes Cy3 and Cy5. [1]

.....

(b) State the type of DNA produced by reverse transcriptase. [1]

.....

(Option B continues on the following page)



(Option B, question 12 continued)

(c) Explain how a microarray detects gene expression.

[3]

.....

.....

.....

.....

.....

.....

(Option B continues on the following page)



40EP21

Turn over

(Option B continued)

- 13. The data shows the amino acids found in a section of histone protein from various mammals. The lighter columns show differences in the amino acid sequence between the mammals.

Histone H1 (resides 120-180)

Human	KKAS	SKPKKA	AASKAPT	KKPKAT	PVKKAK	KKLA	AATPKK	AKKPKT	VKAK	PVKASK	PKKAK	PVK	
Chimp	KKAS	SKPKKA	AASKAPT	KKPKAT	PVKKAK	KKLA	AATPKK	AKKPKT	VKAK	PVKASK	PKKAK	PVK	
Mouse	KKA	AKPKKA	AASKAPS	KKPKAT	PVKKAK	KKPA	AATPKK	AKKPKV	VK	VKPVK	ASKPKK	AKTVK	
Rat	KKA	AKPKKA	AASKAPS	KKPKAT	PVKKAK	KKPA	AATPKK	AKKPKI	VK	VKPVK	ASKPKK	AKPKV	
Cow	KKA	AKPKKA	AASKAPS	KKPKAT	PVKKAK	KKPA	AATPKK	TKKPKT	VKAK	PVKASK	PKKTK	PVK	
	***	:	*****	:	*****	:	*****	:	*****	:	***	:	***

- (a) State the name of the software which could be used to obtain the data. [1]

.....

- (b) Suggest how the nucleotide sequence for this section of the protein may show more differences than the amino acid sequence. [1]

.....

.....

- (c) Describe with reference to the data how multiple sequence alignment can be used to trace evolutionary relationships between humans and other species. [3]

.....

.....

.....

.....

.....

.....

(Option B continues on the following page)



40EP22

(Option B continued)

- 14.** Explain how bacteria of the genus *Pseudomonas* can be used in bioremediation of aquatic environments.

[6]

.....

.....

.....

.....

.....

.....

.....

.....

.....

.....

.....

.....

.....

.....

.....

.....

.....

.....

.....

.....

.....

.....

End of Option B

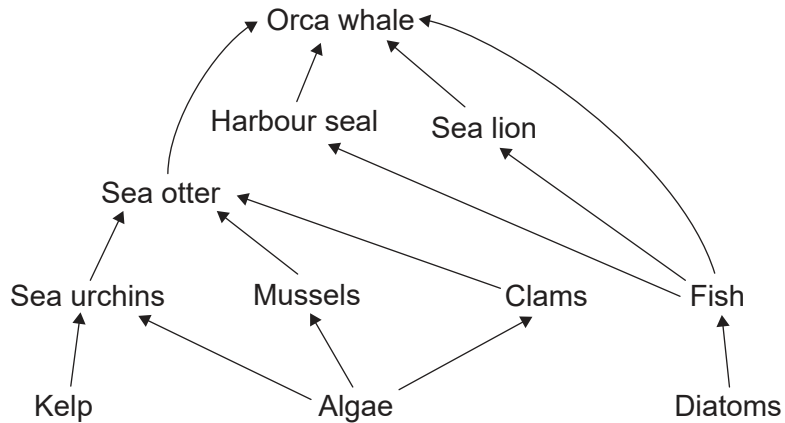


40EP23

Turn over

Option C — Ecology and conservation

15. The diagram shows a simplified marine food web in an area of the North Pacific Ocean.



(a) Identify the trophic level of sea lions. [1]

.....

.....

(b) Outline the additional information that would be required to convert the food web into a pyramid of energy. [2]

.....

.....

.....

.....

(c) Outline a reason that the orca whale would be difficult to represent in a pyramid of energy. [1]

.....

.....

(Option C continues on the following page)



(Option C, question 15 continued)

(d) Explain reasons for the feed conversion ratio in fish being lower than in cattle. [2]

.....

.....

.....

.....

(Option C continues on the following page)



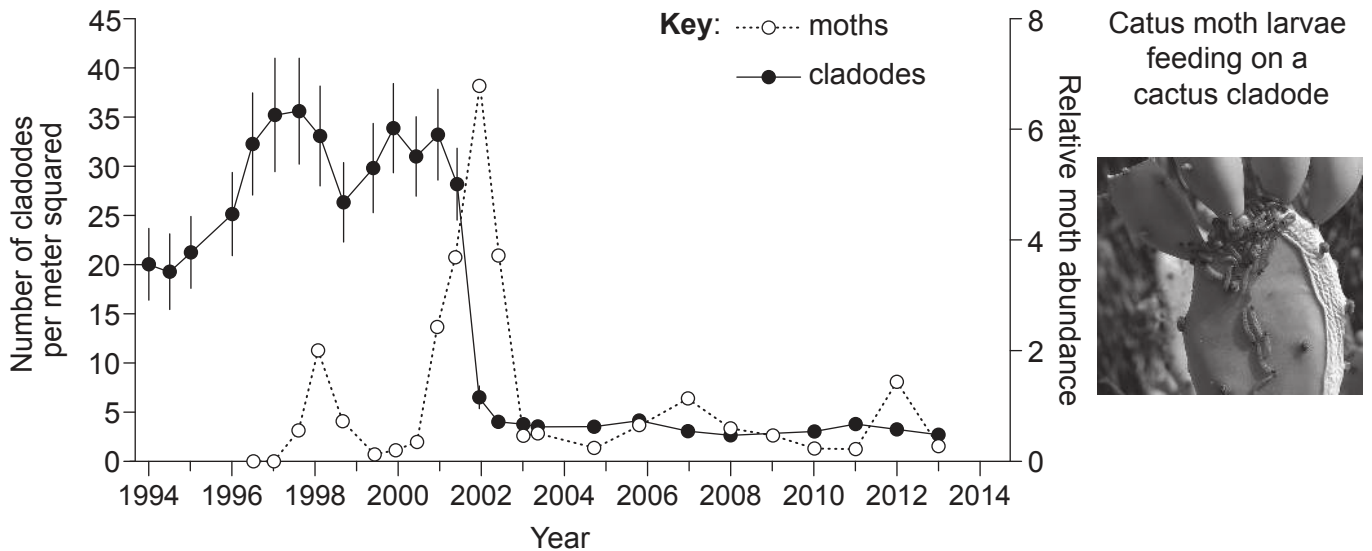
40EP25

Turn over

(Option C continued)

- 16. The prickly pear cactus (*Opuntia stricta*) was first recorded in Kruger National Park, South Africa, in 1950. It spread rapidly, mainly through seeds being dispersed by baboons and elephants.

In 1997, the cactus moth (*Cactoblastis cactorum*) from South America was introduced into the area as a biological control. The larvae of the moth feed on the cactus. The graph shows the number of cladodes (flattened stem sections) of cactus found per m² in the years before and after the introduction of the cactus moth.



- (a) Outline how the prickly pear cactus may become an ecological problem in Kruger National Park.

[2]

.....

.....

.....

.....

- (b) Explain the change in numbers of the cactus moth throughout the study period.

[2]

.....

.....

.....

.....

(Option C continues on the following page)



40EP26

(Option C, question 16 continued)

- (c) Discuss the possible benefits and risks of introducing a biological control into an ecosystem.

[2]

.....

.....

.....

.....

(Option C continues on the following page)

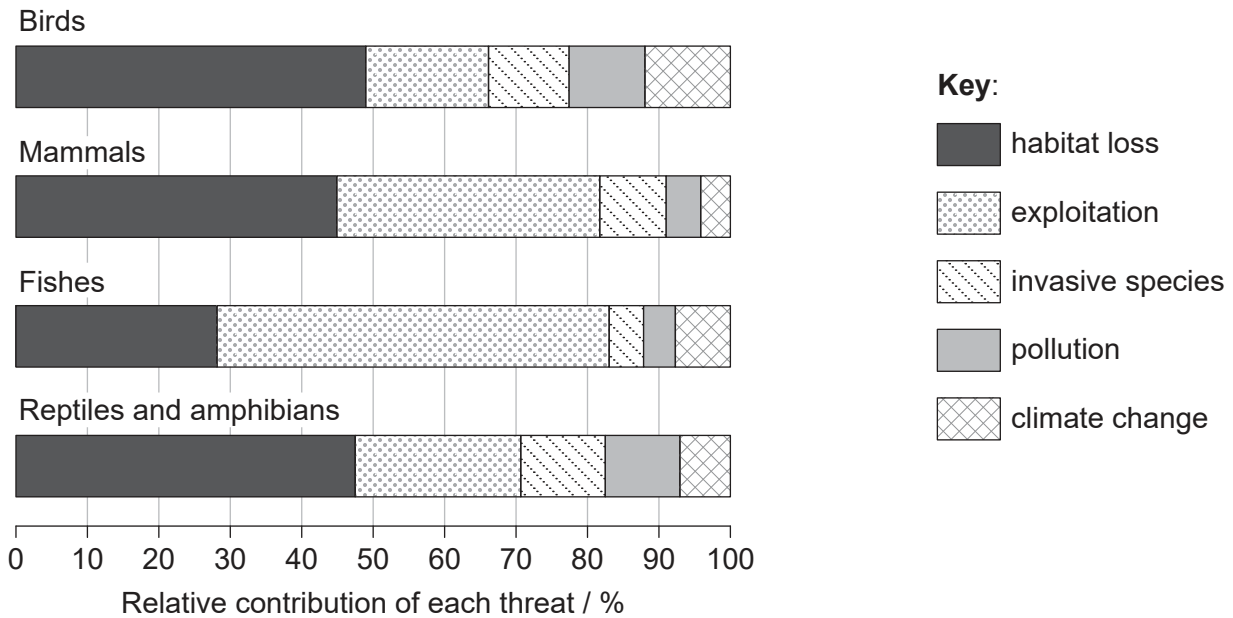


40EP27

Turn over

(Option C continued)

17. The Living Planet Index published by the World Wildlife Fund (WWF) tracks the state of global biodiversity by measuring the population sizes of thousands of vertebrate species around the world. The 2018 index shows an overall decline of 60% in population size between 1970 and 2014. The chart shows the main threats to each taxonomic group in 2018.



(a) Suggest a reason for the loss of bird habitats. [1]

.....

.....

(b) Outline how *in situ* conservation may help preserve populations of amphibians. [2]

.....

.....

.....

.....

(c) Distinguish between species richness and evenness as components of biodiversity. [1]

.....

.....

(Option C continues on the following page)



(Option C, question 17 continued)

(d) Explain how an indicator species may help monitor pollution.

[2]

.....

.....

.....

.....

(Option C continues on the following page)

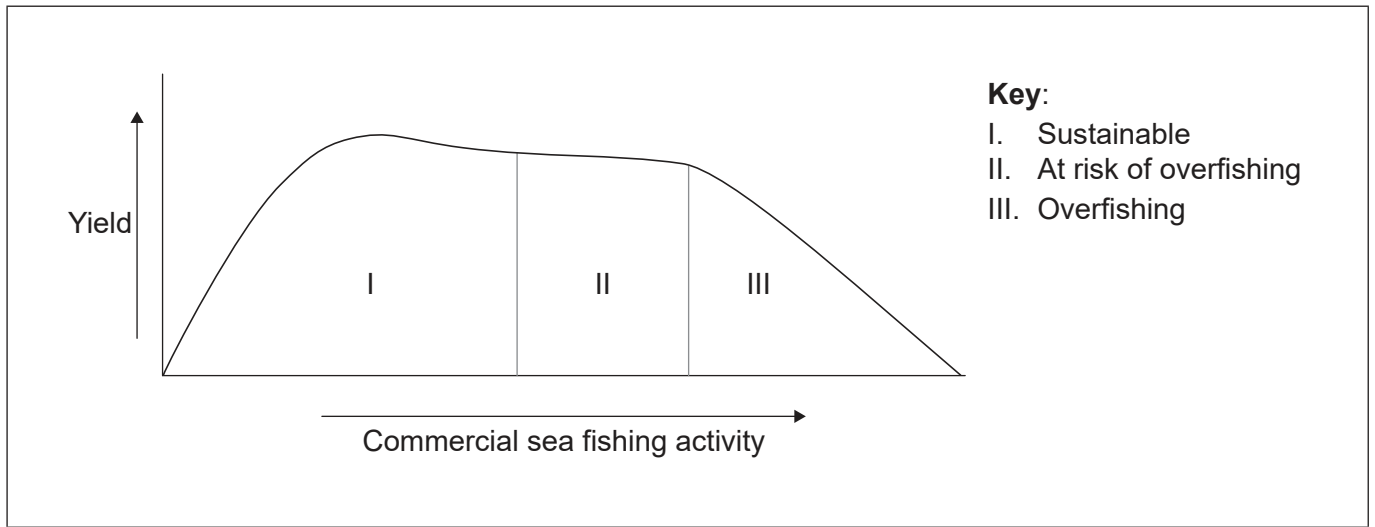


40EP29

Turn over

(Option C continued)

18. The diagram shows the relationship between commercial sea fishing activity and yield, and how this affects sustainability.



(a) Label with a P on the *x*-axis the level of commercial sea fishing activity that would result in maximum sustainability. [1]

(b) Outline the reason for the change in yield in region III of the diagram. [1]

.....

.....

(c) Suggest a reason that it is difficult to keep global commercial sea fishing activity at a sustainable level. [1]

.....

.....

(Option C continues on the following page)



(Option C, question 18 continued)

(d) Explain how the population of fish in a pond could be estimated using the capture-mark-release-recapture method.

[3]

.....

.....

.....

.....

.....

.....

19. Explain the role of bacteria in the nitrogen cycle.

[6]

.....

.....

.....

.....

.....

.....

.....

.....

.....

.....

.....

.....

.....

.....

.....

.....

.....

.....

.....

.....

.....

.....

.....

.....

.....

.....

.....

.....

.....

End of Option C

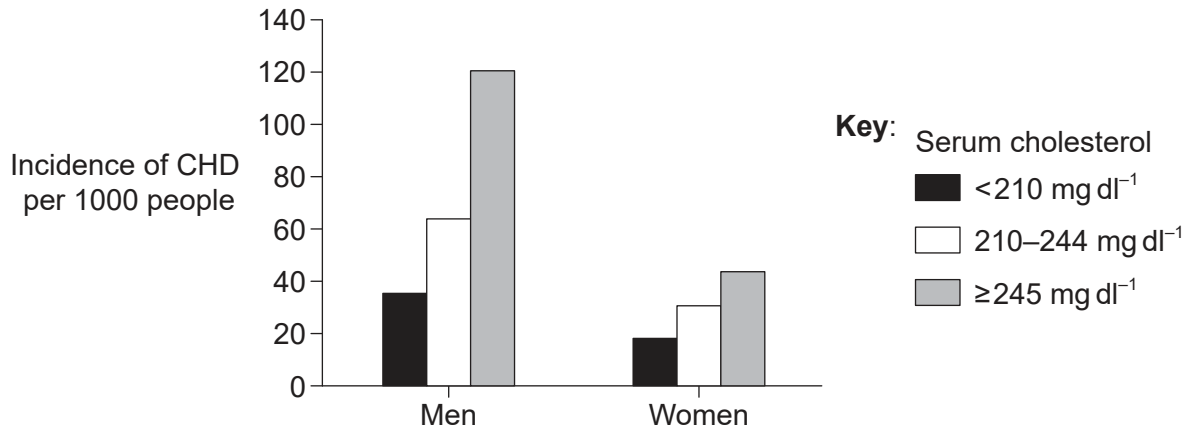


40EP31

Turn over

Option D — Human physiology

20. The level of cholesterol in blood can be used as an indicator of the risk of cardiovascular disease. The chart shows the incidence of coronary heart disease (CHD) per 1000 people aged between 40 and 59 years according to their serum cholesterol level.



(a) Compare and contrast the effect on men and women of an increase in serum cholesterol. [2]

.....

.....

.....

.....

(b) Suggest a reason for high total serum cholesterol not always being an indicator of CHD risk. [1]

.....

.....

(Option D continues on the following page)



(Option D, question 20 continued)

(c) Describe the reactions that occur in the liver, leading to the production of bile. [3]

.....

.....

.....

.....

.....

.....

(d) State **one** long-term consequence of jaundice in newborn babies if this condition is not treated. [1]

.....

(Option D continues on the following page)



40EP33

Turn over

(Option D continued)

21. The diagram shows how the bacterium *Vibrio cholerae* can cause dehydration in humans.

Removed for copyright reasons

(a) State where in the digestive system *Vibrio cholerae* acts, leading to dehydration. [1]

.....

(b) Explain how cholera toxin causes dehydration. [3]

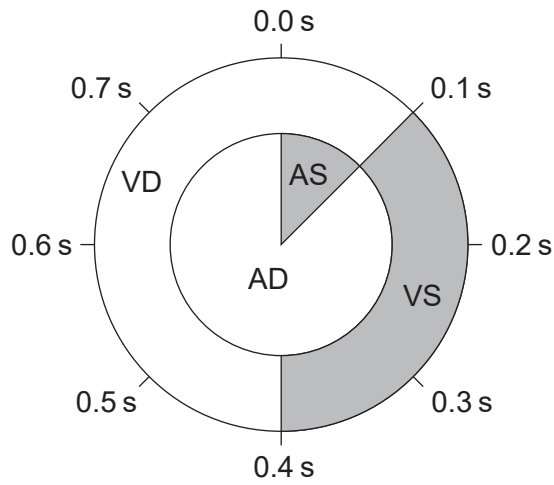
.....
.....
.....
.....
.....
.....

(Option D continues on the following page)



(Option D continued)

22. The diagram indicates the condition of the heart chambers during a heart cycle of duration 0.8 s, beginning with atrial systole.



Key:

- AS = Atrial systole
- AD = Atrial diastole
- VS = Ventricular systole
- VD = Ventricular diastole

(a) Calculate how long all the heart chambers are in diastole at the same time. [1]

.....

(b) State the letter on an ECG corresponding with the events from 0.0 to 0.1 s. [1]

.....

(c) Describe the state of the heart valves at 0.3 s. [2]

.....

.....

.....

.....

(Option D continues on the following page)



40EP35

Turn over

(Option D, question 22 continued)

(d) Explain how cardiac muscle is adapted to its function.

[3]

.....

.....

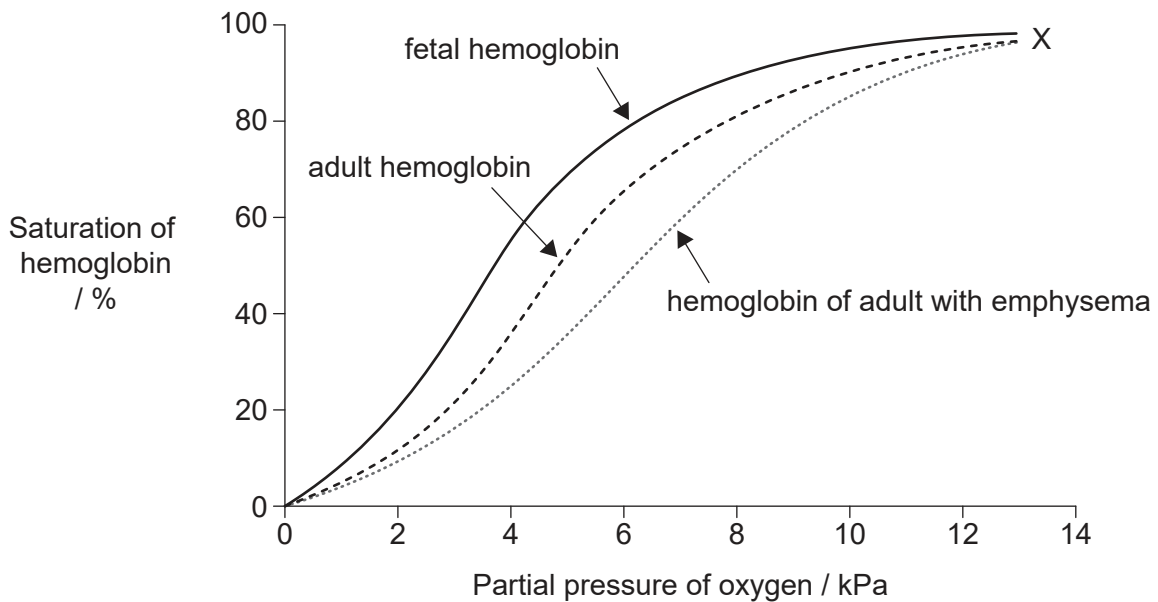
.....

.....

.....

.....

23. The graph shows the oxygen dissociation curves for hemoglobin in a fetus, a healthy adult and an adult with emphysema.



(a) State where in the body the blood would be flowing at point X on the graph.

[1]

.....

(Option D continues on the following page)



40EP36

(Option D, question 23 continued)

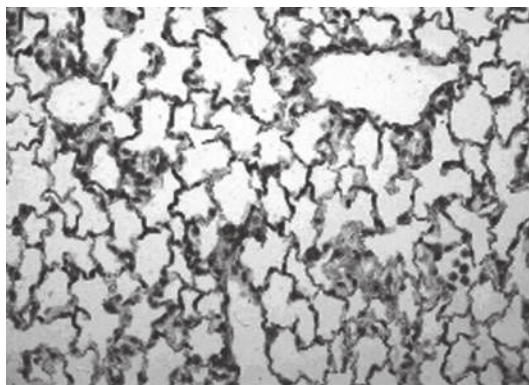
- (b) Outline the reason that the curve for fetal hemoglobin is to the left of normal adult hemoglobin. [1]

.....
.....

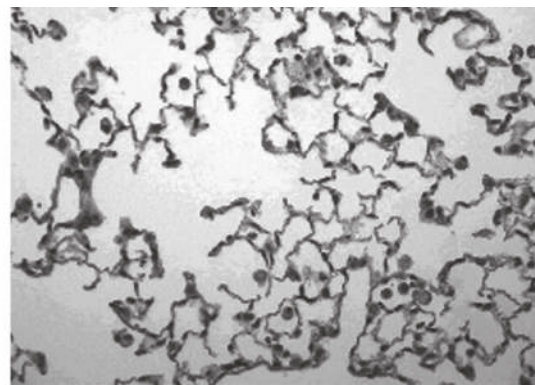
- (c) State where the curve for myoglobin would be drawn on the diagram. [1]

.....
.....

- (d) The micrographs show mammalian lung tissue in its healthy condition and with emphysema.



Healthy



With emphysema

Explain how emphysema is treated.

[3]

.....
.....
.....
.....
.....

(Option D continues on the following page)



40EP37

Turn over

(Option D continued)

24. Athletes may take growth hormone to build muscle mass and improve performance. Explain the action of peptide hormones, using growth hormone as an example.

[6]

.....

.....

.....

.....

.....

.....

.....

.....

.....

.....

.....

.....

.....

.....

.....

.....

.....

.....

.....

.....

.....

.....

End of Option D



Disclaimer:

Content used in IB assessments is taken from authentic, third-party sources. The views expressed within them belong to their individual authors and/or publishers and do not necessarily reflect the views of the IB.

References:

1. Abdulaal, W.H., Almulaiky, Y.Q. and El-Shishtawy, R.M., 2020. Encapsulation of HRP Enzyme onto a Magnetic Fe₃O₄ Np-PMMA Film via Casting with Sustainable Biocatalytic Activity. *Catalysts*, [e-journal] 10(2), p. 181. <https://doi.org/10.3390/catal10020181>. Open access.
2. Kgerow16, 2015. Louis Pasteur Experiment. [online] Available at: https://commons.wikimedia.org/wiki/File:Louis_Pasteur_Experiment.svg [Accessed 8 March 2022]. Public domain.
3. Lü, P., Huang, X., Li, H., Liu, J., He, S., Joyce, D. C. and Zhang, Z., 2011. Continuous Automatic Measurement of Water Uptake and Water Loss of Cut Flower Stems, *HortScience horts*, [e-journal] 46(3), pp. 509–512. <https://doi.org/10.21273/HORTSCI.46.3.509>.
4. Cascadia College, n.d. *Frog development*. [images online] Available at: https://faculty.cascadia.edu/ccollin/frog_development.htm [Accessed 8 November 2021].
5. (c) Bell, A., 2012. A Resonance Approach to Cochlear Mechanics. *PLOS ONE* [e-journal]. <https://doi.org/10.1371/journal.pone.0047918>. Open Access.
6. Copyright 1998 Society for Neuroscience.
7. Image: Harrison, J.J., 2019. Rhipidura leucophrys - Glen Davis. [image online] Available at: <https://commons.wikimedia.org/w/index.php?curid=83691160> [Accessed 8 November 2021]. Public domain.
11. Tang, L., Zhang, Y., Li, C., et al., 2022. Biological Stability of Water-Based Cutting Fluids: Progress and Application. *Chin. J. Mech. Eng.* [e-journal] 35(3). <https://doi.org/10.1186/s10033-021-00667-z>. Open access.
12. Diagram of typical dual-colour microarray experiment, n.d. [online] Available at: https://www.wikiwand.com/en/DNA_microarray [Accessed 8 March 2022]. Public domain.
13. Shafee, T., 2014. Histone Alignment. [online] Available at: <https://commons.wikimedia.org/w/index.php?curid=37188728>. Public domain.
16. graph: Hill, M.P., et al., 2020. More than a Century of Biological Control Against Invasive Alien Plants in South Africa: A Synoptic View of What Has Been Accomplished. In: van Wilgen, B., Measey, J., Richardson, D., Wilson, J. and Zengeya, T. (eds). *Biological Invasions in South Africa. Invading Nature – Springer Series in Invasion Ecology*, 14, pp. 553–572. https://doi.org/10.1007/978-3-030-32394-3_19. Open access.
Image: By Ignacio Baez / USDA - <https://www.forestryimages.org/browse/detail.cfm?imgnum=5015065>, Public Domain, <https://commons.wikimedia.org/w/index.php?curid=14986324>.
17. WWF, 2018. *Living Planet Report 2018: Aiming Higher*. [PDF online] Available at: https://www.wwf.org.uk/sites/default/files/2018-10/LPR2018_Full%20Report.pdf, p. 73. Open access.
18. Lart, W., 2022. *Overview of sustainable fisheries assessment and management; Seafish FS112_08_19*. [PDF online] Available at: <https://www.seafish.org/document?id=3fc8597a-0ae7-43c7-874c-d0611c1f8cf8> [Accessed 9 March 2022].
20. Wong, N. and Levy, D., 2013. Legacy of the Framingham Heart Study: Rationale, Design, Initial Findings, and Implications. *Global Heart*, [e-journal] 8(1), pp. 3–9. <https://doi.org/10.1016/j.gheart.2012.12.001>. Open access.
22. Ivan Shun Ho, 2011. Visualizing the Cardiac Cycle: A Useful Tool to Promote Student Understanding. *Journal of Microbiology & Biology Education* [e-journal], 12(1). <https://doi.org/10.1128/jmbe.v12i1.261>. Reproduced with permission from American Society for Microbiology.
23. Reproduced with permission of the © ERS 2023: *European Respiratory Journal* 26 (2) 204–213; DOI: 10.1183/09031936.05.00095204 Published 1 August 2005.

All other texts, graphics and illustrations © International Baccalaureate Organization 2023



40EP39

Please **do not** write on this page.

Answers written on this page
will not be marked.



40EP40